

Coloring plane graphs with independent crossings

Daniel Král^{*} Ladislav Stacho[†]

Abstract

We show that every plane graph with maximum face size four whose all faces of size four are vertex-disjoint is cyclically 5-colorable. This answers a question of Albertson whether graphs drawn in the plane with all crossings independent are 5-colorable.

1 Introduction

Coloring of graphs embedded in surfaces, in the plane in particular, attracts a lot of attention of researchers in graph theory. The famous Four Color Theorem [4, 22] asserts that every graph that can be drawn in the plane with no crossings is 4-colorable. It is natural to ask what number of colors is needed to color graphs that can be embedded in the plane with a restricted number of crossings. If every edge is crossed by at most one edge (such graphs are called 1-embeddable and we restrict our attention solely to such graphs throughout this paper), Ringel [21] conjectured that six colors suffice. This conjecture was answered in affirmative by Borodin [5, 7].

Albertson [1] considered graphs with even more restricted structure of crossings. Two distinct crossings are independent if the end-vertices of the crossed pair of edges are mutually different. In particular, if all crossings are independent, then each edge is crossed by at most one other edge. Albertson showed that every graph drawn in the plane with at most 3 crossings is 5-colorable (note that the complete graph of order five can be drawn in the

^{*}Institute for Theoretical Computer Science (ITI), Faculty of Mathematics and Physics, Charles University, Malostranské náměstí 25, 118 00 Prague 1, Czech Republic. E-mail: kral@kam.mff.cuni.cz. Institute for Theoretical computer science is supported as project 1M0545 by Czech Ministry of Education.

[†]Department of Mathematics, Simon Fraser University, 8888 University Dr, Burnaby, BC, V5A 1S6, Canada. E-mail: lstacho@sfu.ca. This research was supported by NSERC grant 611368.

plane with a single crossing) and conjectured [1, 2] that every graph that can be drawn in the plane with all its crossings independent is 5-colorable. In this paper, we prove his conjecture.

The coloring problem that we study is closely related to the notion of cyclic coloring. A coloring of vertices of an embedded graph is *cyclic* if any two vertices incident with the same face receive distinct colors. Let us show how the original problem can be expressed using this notion. Let G be a plane graph with all its crossings independent. We can assume (by adding edges if necessary) that all faces of G that do not contain a crossing have size three and those that contain a crossing have size four. Remove now all edges that are crossed by another edge. Clearly, a cyclic coloring of the obtained graph G' is a proper coloring of the original graph G and vice versa. The assumption that all crossings of G are independent translates to the fact that all faces of G' with size four are vertex disjoint. Hence, our main result can be stated as follows:

Theorem 1. *Let G be a plane graph with faces of size three and four only. If all the faces of size four are vertex-disjoint, then G is cyclically 5-colorable.*

Before we proceed with proving Theorem 1, let us survey known results on cyclic colorings of plane graphs. Since the maximum face size is a lower bound on the number of colors needed in a cyclic coloring, it is natural to study the number of colors needed to cyclically color a plane graph as a function of its maximum face size Δ^* . If $\Delta^* = 3$, then the graph is a triangulation and the optimal number of colors is four by the Four Color Theorem. If $\Delta^* = 4$, then the optimal number of colors six by results of Borodin [5, 7]; the optimality is witnessed by the prism over K_3 . For larger values of Δ^* , the Cyclic Coloring Conjecture of Ore and Plummer [19] asserts that the optimal number of colors is equal to $\lfloor 3\Delta^*/2 \rfloor$ (the optimality is witnessed by a drawing of K_4 with subdivided edges). After a series of papers [6, 8] on this problem, the best general bound of $\lfloor 5\Delta^*/3 \rfloor$ has been obtained by Sanders and Zhao [23]. Amini, Esperet and van den Heuvel [3] cleverly used a result by Havet, van den Heuvel, McDiarmid and Reed [10, 11] on coloring squares of planar graphs and showed that the Cyclic Coloring Conjecture is asymptotically true in the following sense: for every $\varepsilon > 0$, there exists Δ_ε such that every plane graph of maximum face size $\Delta^* \geq \Delta_\varepsilon$ admits a cyclic coloring with at most $(\frac{3}{2} + \varepsilon) \Delta^*$ colors.

There are two other conjectures related to the Cyclic Coloring Conjecture of Ore and Plummer. A conjecture of Plummer and Toft [20] asserts that every 3-connected plane graph is cyclically (Δ^*+2) -colorable. This conjecture is known to be true for $\Delta^* \in \{3, 4\}$ and $\Delta^* \geq 18$, see [9, 14, 15, 16]. The restriction of the problems to plane graphs with a bounded maximum face size

is removed in the Facial Coloring Conjecture [17] that asserts that vertices of every plane graph can be colored with at most $3\ell + 1$ colors in such a way that every two vertices joined by a facial walk of length at most ℓ receive distinct colors. This conjecture would imply the Cyclic Coloring Conjecture for odd values of Δ^* . Partial results towards proving this conjecture can be found in [12, 13, 17, 18].

2 Preliminaries

The proof of Theorem 1 is divided into several steps. We first identify configurations that cannot appear in a counterexample with the smallest number of vertices. Later, using a discharging argument, we show that a plane graph avoiding all these configurations cannot exist. In particular, vertices and faces of a counterexample are assigned charge whose total sum is negative and which is redistributed preserving its total sum. Lemmas 11–16 claim that the final amount of charge of every vertex and every face is non-negative which excludes the existence of a counterexample and yields a proof of Theorem 1.

We now introduce notation used throughout the paper. Let us start with some general notation. A vertex of degree d is referred to as a d -*vertex* and a face of size d as a d -*face*. A *cyclic neighbor* of a vertex v is a vertex lying on the same face as v and the *cyclic degree* of v is the number of its cyclic neighbors.

Our goal is to prove Theorem 1. We assume that the statement of the theorem is false and consider a counterexample with the smallest number of vertices; such a counterexample is referred to as *minimal*, i.e., a minimal counterexample G is a plane graph with faces of size three and four such that all 4-faces of G are vertex-disjoint, G has no cyclic 5-coloring and any graph G' satisfying assumptions of Theorem 1 with a smaller number of vertices than G has a cyclic 5-coloring.

A vertex v of a minimal counterexample G is *pentagonal* if the degree of v is five, v is incident with no 4-face and every neighbor of v is incident with a 4-face. A 4-face incident with a neighbor of a pentagonal vertex v is said to be *close* to v if it contains an edge between two consecutive neighbors of v ; a 4-face incident with a neighbor of a pentagonal vertex that is not close is *distant*. If f is close/distant to a vertex v , then we also say that v is close/distant to f . A pentagonal vertex is *solitary* if no 4-face is close to it.

Let v be a pentagonal vertex and v' a neighbor of it. Let w' and w'' be the common neighbors of v' and another neighbor of v (see Figure 1). If the 4-face incident with v' contains both w' and w'' , then the degree of v' is five. If the 4-face contains one of the vertices w' and w'' , then v' is said to be

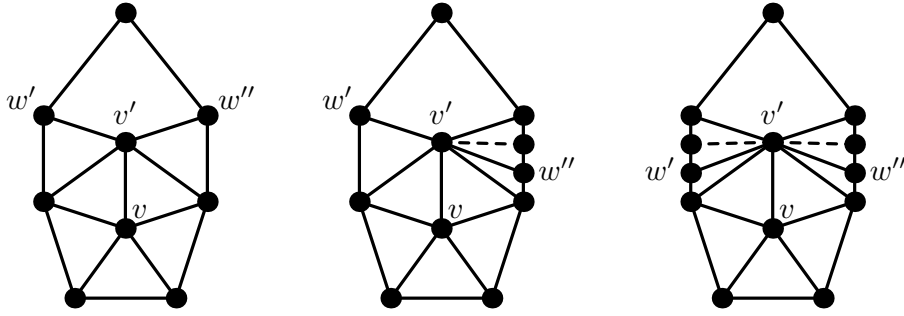


Figure 1: Examples of a pentagonal vertex v adjacent to a vertex v' of degree five, a one-sided vertex and a double-sided vertex (in this order).

one-sided, and if the 4-face incident with v' contains neither w' and w'' , then v' is *double-sided*. Observe that if a pentagonal vertex is adjacent to a vertex of degree five, it must also be adjacent to a double-sided vertex (otherwise, some of the 4-faces incident with its neighbors would not be vertex-disjoint).

3 Reducible configurations

In this section, we show that a minimal counterexample cannot contain certain substructures which we refer to as *configurations*. Let us start with the following simple observation.

Lemma 2. *A minimal counterexample G does not contain a separating cycle of length two or three.*

Proof. Assume that G contains a separating cycle C of length two or three. Let G' and G'' be the subgraphs lying in the interior and the exterior of the cycle C (including the cycle C itself). If C is of length two, remove one of the two parallel edges bounding C from G' and G'' . By the minimality of G , both G' and G'' have a cyclic 5-coloring. The colorings of G' and G'' readily combine to a cyclic 5-coloring of G . \square

We will use Lemma 2 as follows: if we identify some vertices of a minimal counterexample, Lemma 2 guarantees that the resulting graph is loopless as long as every pair of the identified vertices have a common neighbor. Indeed, if a loop appeared, the two identified vertices with their common neighbor would form a separating cycle of length three.

We next show that the minimum degree of a minimal counterexample is at least five.

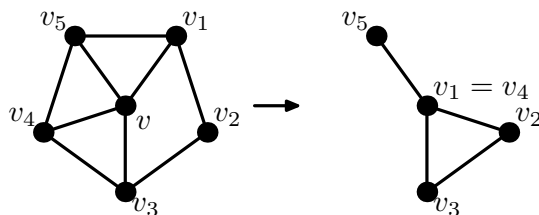


Figure 2: A vertex of degree four with five cyclic neighbors and its reduction.

Lemma 3. *A minimal counterexample G does not contain a vertex v of degree four or less.*

Proof. If the cyclic degree of v is less than five, let G' be the graph obtained by removing v from G and triangulating the new face. By the minimality of G , G' has a cyclic 5-coloring. Since the cyclic degree of v is less than five, this coloring can be extended to a cyclic 5-coloring of the original graph G . Hence, we can assume that the cyclic degree of v is five. In particular, the degree of v is four and v is contained in a 4-face (see Figure 2).

Let v_1, \dots, v_5 be the neighbors of v . By symmetry we can assume that the 4-face incident with v is $vv_1v_2v_3$. Let G' be the graph obtained from G by removing the vertex v and identifying the vertices v_1 and v_4 to a new vertex w , see Figure 2. Note that the vertex w is contained in at most one 4-face since the 4-face incident with v_1 becomes a 3-face in G' . Since the vertices v_1 and v_4 have a common neighbor, the graph G' is loopless by Lemma 2.

By the minimality of G , G' has a cyclic 5-coloring. Since two of the neighbors of v (the vertices v_1 and v_4) are assigned the same color and the cyclic degree of v is five, the coloring can be extended to a cyclic 5-coloring of G . \square

Our next step is to show that all vertices of degree five that appear in a minimal counterexample must be pentagonal or incident with a 4-face.

Lemma 4. *Every vertex v of degree five in a minimal counterexample G is either pentagonal or incident with a 4-face.*

Proof. We proceed as in the proof of Lemma 3. Consider a 5-vertex v incident with 3-faces only such that one of its neighbors is not incident with a 4-face. Let v_1, \dots, v_5 be the neighbors of v and v_1 a neighbor not incident with a 4-face. Remove v and identify vertices v_1 and v_3 (see Figure 3). Since the vertex v_1 is not incident with a 4-face in G , the new vertex is contained in at most one 4-face. By the minimality of G , the new graph can be cyclically 5-colored and this coloring readily yields a coloring of G . \square

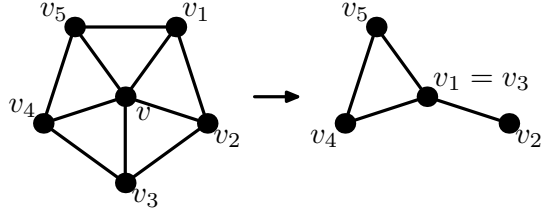


Figure 3: A non-pentagonal vertex of degree five incident with no 4-face and its reduction.

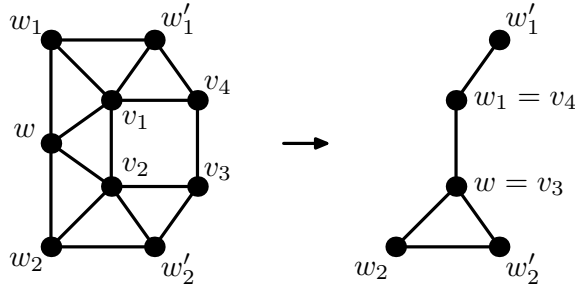


Figure 4: A reduction of a 4-face with two adjacent 5-vertices.

In the next lemma, we show that no 4-face of a minimal counterexample contains two adjacent vertices of degree five.

Lemma 5. *A minimal counterexample G does not contain a 4-face with two adjacent vertices of degree five.*

Proof. Assume that G contains a 4-face $v_1v_2v_3v_4$ such that the degrees of v_1 and v_2 are five. Let w be the common neighbor of v_1 and v_2 , w_1 and w'_1 the other neighbors of v_1 (named in such a way that w'_1 is a neighbor of v_4) and w_2 and w'_2 the other neighbors of v_2 . See Figure 4.

Let G' be the graph obtained by removing the vertices v_1 and v_2 and identifying the vertices w and v_3 and the vertices w_1 and v_4 . Clearly, the graph G' is loopless (as the graph G has no separating 3-cycles by Lemma 2) and all its 4-faces are vertex-disjoint.

By the minimality of G , G' has a cyclic 5-coloring. Assign the vertices of G the colors of their counterparts in G' . Next, color the vertex v_2 : observe that two of its 6 cyclic neighbors have the same color and one is uncolored. Hence, v_2 can be colored. Since the vertex v_1 has 6 cyclic neighbors and two pairs of its cyclic neighbors have the same color, the coloring can also be extended to v_1 . \square

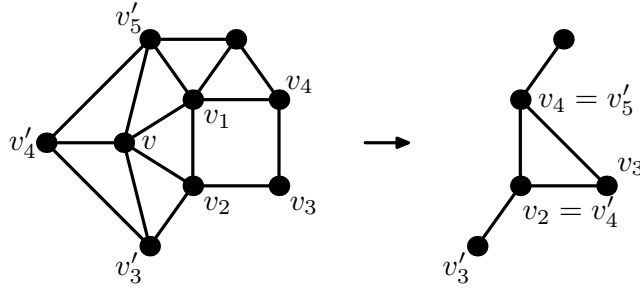


Figure 5: A reduction of a 4-face with a vertex of degree five adjacent to a close pentagonal vertex.

In the next two lemmas, we show that a 4-face of a minimal counterexample cannot contain a vertex of degree at most six adjacent to a close pentagonal vertex.

Lemma 6. *A minimal counterexample G does not contain a vertex of degree five contained in a 4-face that is adjacent to a close pentagonal vertex.*

Proof. Assume that G contains a 4-face $v_1v_2v_3v_4$ such that v_1 has degree five and is adjacent to a close pentagonal vertex v . Let $v_1, v_2, v'_3, v'_4, v'_5$ be the neighbors of v (see Figure 5). Let G' be the graph obtained by removing the vertices v and v_1 and identifying the vertices v_2 and v'_4 and the vertices v_4 and v'_5 . Since every pair of identified vertices has a common neighbor, G' is loopless by Lemma 2. The 4-faces of G' are also vertex-disjoint.

By the minimality of G , the graph G' has a cyclic 5-coloring. Assign the vertices of G the colors of their counterparts in G' . We next color the vertex v_1 with an available color (the cyclic degree of v_1 is six, it has a pair of neighbors colored with the same color and an uncolored neighbor) and then the vertex v (its cyclic degree is five and it has a pair of neighbors colored with the same color). The existence of this coloring contradicts that G is a counterexample. \square

Lemma 7. *A minimal counterexample does not contain a vertex of degree six contained in a 4-face that is adjacent to a close pentagonal vertex.*

Proof. Assume that G contains a 4-face $v_1v_2v_3v_4$ such that v_1 has degree six and is adjacent to a close pentagonal vertex v . Let $v_1, v_2, v'_3, v'_4, v'_5$ be the neighbors of v and w the common neighbor of v_1 and v'_5 (since all 4-faces are vertex disjoint, both faces containing the edge $v_1v'_5$ have size three and the vertex w must exist). Also see Figure 6. Let G' be the graph obtained

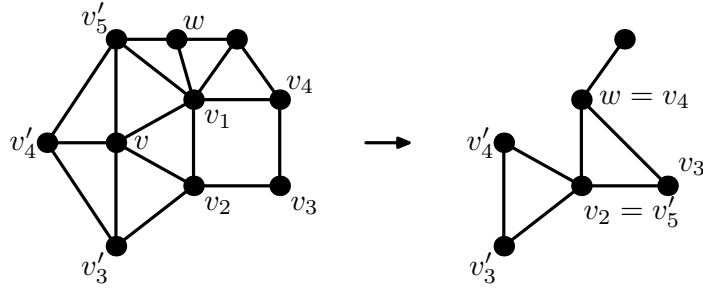


Figure 6: A reduction of a 4-face with a vertex of degree six adjacent to a close pentagonal vertex.

from G by removing the vertices v and v_1 and identifying the vertices v_2 and v'_5 and the vertices v_4 and w . Since every pair of identified vertices has a common neighbor, G' is loopless by Lemma 2. The 4-faces of G' are also vertex-disjoint.

By the minimality of G , the graph G' has a cyclic 5-coloring. Assign the vertices of G the colors of their counterparts in G' . We next color the vertex v_1 with an available color (the cyclic degree of v_1 is seven, it has two pairs of neighbors colored with the same color and an uncolored neighbor) and then the vertex v (its cyclic degree is five and it has a pair of neighbors colored with the same color). Again, the existence of this coloring contradicts that G is a counterexample. \square

By Lemmas 6 and 7, we have:

Lemma 8. *Let G be a minimal counterexample and v a pentagonal vertex with neighbors v_1, v_2, v_3, v_4 and v_5 in G . If the edge $v_i v_{i+1}$ is contained in a 4-face, then the degrees of v_i and v_{i+1} are at least seven.*

At the end of this section, we exclude two more complex configurations from appearing around a pentagonal vertex in a minimal counterexample. The configurations described in Lemmas 9 and 10 are depicted in Figures 7 and 8, respectively.

Lemma 9. *No minimal counterexample contains a pentagonal vertex v with neighbors v_1, \dots, v_5 such that for some $i \in \{1, \dots, 5\}$*

1. *the degree of v_i is six,*
2. *the vertices v_i and v_{i+1} have a common neighbor w of degree five,*
3. *the vertices v_i and w have a common neighbor w' , and*

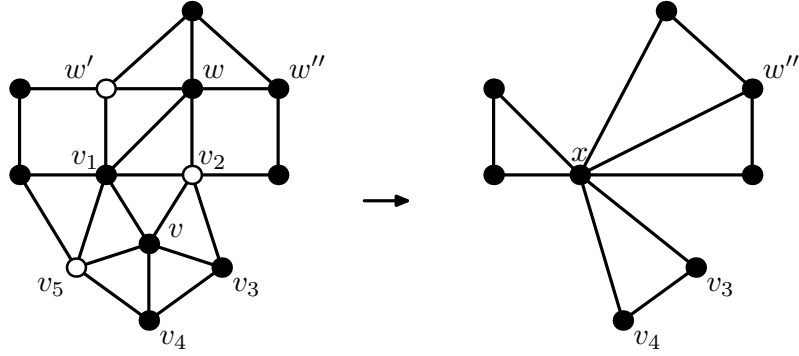


Figure 7: The configuration described in Lemma 9. The vertex x is obtained by identifying vertices drawn with empty circles.

4. the edges $v_i w'$ and $v_{i+1} w$ lie in 4-faces.

Proof. We can assume that $i = 1$. Let w'' be the neighbor of w distinct from v_2 that lies on the 4-face incident with w . Remove the vertices v , v_1 and w from G , identify the vertices v_2 , v_5 and w' to a new vertex x , and add an edge xw'' . Let G' be the resulting graph. As any pair of identified vertices have a common neighbor, the graph $G' \setminus \{xw''\}$ is loopless by Lemma 2. If the edge xw'' were a loop, then the vertices v_5 and w'' would coincide in G' which would yield a separating 3-cycle $v_1 w w'' = v_5$ in G . We conclude that G' is loopless. Similarly, all 4-faces of G' are vertex-disjoint.

By the minimality of G , the graph G' has a cyclic 5-coloring. Assign vertices of G the colors of their counterparts in G' . The only vertices without a color are the vertices w , v_1 and v which we color in this order. Let us verify that each of these vertices is cyclically adjacent to vertices of at most four distinct colors when we want to color it. At the beginning, the vertex w has six cyclic neighbors, out of which two have the same color (v_2 and w') and one is uncolored. Next, the vertex v_1 has cyclic degree seven but it is adjacent to a triple of vertices with the same color and an uncolored vertex. Finally, the cyclic degree of v is five and two of its neighbors have the same color. The constructed coloring violates our assumption that G is a counterexample. \square

Lemma 10. *No minimal counterexample contains a pentagonal vertex v with neighbors v_1, \dots, v_5 such that for some $i \in \{1, \dots, 5\}$*

1. the degree of v_i is six,
2. the vertices v_i and v_{i+1} have a common neighbor w of degree six,
3. the vertices v_i and w have a common neighbor w' , and

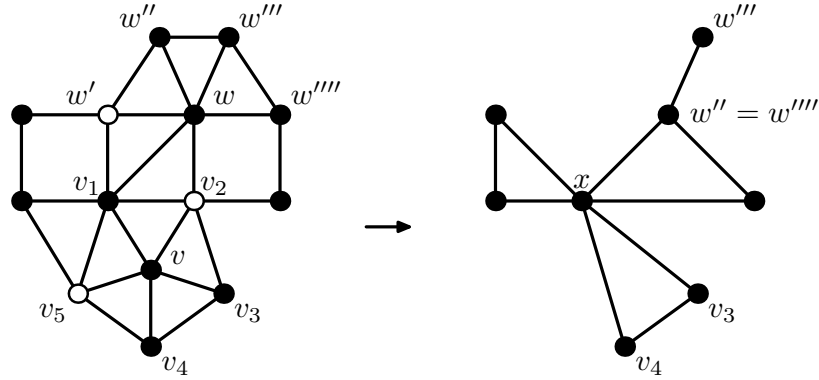


Figure 8: The configuration described in Lemma 10. The vertex x is obtained by identifying vertices drawn with empty circles.

4. the edges $v_i w'$ and $v_{i+1} w$ lie in 4-faces.

Proof. We can assume that $i = 1$. Let w'' , w''' and w'''' be the neighbors of w as depicted in Figure 8. Remove the vertices v , v_1 and w from G , identify the vertices v_2 , v_5 and w' to a new vertex x and identify the vertices w'' and w'''' . Let G' be the resulting graph. As any pair of identified vertices have a common neighbor, the graph G' is loopless by Lemma 2. Moreover, all 4-faces of G' are vertex-disjoint.

By the minimality of G , the graph G' has a cyclic 5-coloring. Now assign vertices of G the colors of their counterparts in G' . The only vertices without a color are the vertices w , v_1 and v which we color in this order. Let us verify that each of these vertices is cyclically adjacent to vertices of at most four distinct colors when we want to color it. At the beginning, the vertex w has seven cyclic neighbors, out of which two pairs have the same color (the pair v_2 and w' , and the pair w'' and w'''') and one neighbor is uncolored. Next, the vertex v_1 has also cyclic degree seven but it is adjacent to a triple of vertices with the same color and an uncolored vertex. Finally, the cyclic degree of v is five and two of its neighbors have the same color. Finally, the obtained coloring contradicts that G is a counterexample. \square

4 Discharging rules

The core of the proof is an application of the standard discharging method. We fix a minimal counterexample and assign each vertex and each face initial charge as follows: each d -vertex receives $d - 6$ units of charge and each d -face receives $2d - 6$ units of charge. An easy application of Euler formula

yields that the sum of initial amounts of charge is -12 . The amount of charge is then redistributed using the rules introduced in this section in such a way that all vertices and faces have non-negative amount of charge at the end. Since the redistribution preserves the total amount of charge, this will eventually contradict the existence of a minimal counterexample.

Let us start presenting the rules for charge redistribution. Rules S1 and S2 guarantee that the amount of final charge of every vertex incident with a 4-face is zero (vertices not incident with a 4-face are not affected by Rules S1 and S2).

Rule S1 Every 5-vertex receives 1 unit of charge from its (unique) incident 4-face.

Rule S2 Every d -vertex, $d \geq 6$, sends $d - 6$ units of charge to its incident 4-face.

A more complex set of rules is needed to guarantee that the amount of final charge of pentagonal vertices is non-negative. The following notation is used in Rules P5a–P8+: v is a pentagonal vertex adjacent to a vertex w incident with a 4-face f distant from v ; the neighbors of w incident with f are denoted w' and w'' . A vertex w is understood to be one-sided or double-sided with respect to v . Rules P5a–P7c are illustrated in Figure 9.

Rule PC Every pentagonal vertex receives 1 unit of charge from each close 4-face.

Rule P5a If w has degree five and exactly one of the vertices w' and w'' have degree six, then v receives 0.2 units of charge from f .

Rule P5b If w has degree five and both w' and w'' have degree at least seven, then v receives 0.4 units of charge from f .

Rule P6a If w has degree six, exactly one of the vertices w' and w'' have degree five and the other has degree six, then v receives 0.25 units of charge from f .

Rule P6b If w has degree six and the sum of the degrees of w' and w'' is at least twelve, then v receives 0.5 units of charge from f .

Rule P7a If w is a one-sided vertex of degree seven and both w' and w'' have degree five, then v receives 0.3 units of charge from f .

Rule P7b If w is a one-sided vertex of degree seven and at most one of the vertices w' and w'' has degree five, then v receives 0.5 units of charge from f .

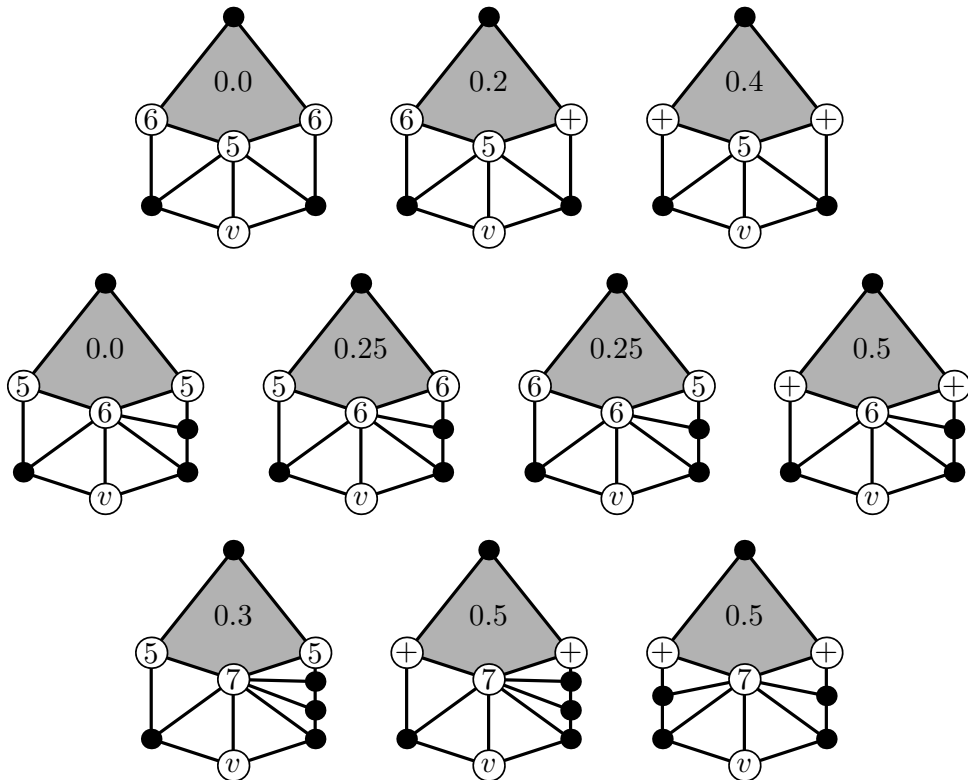


Figure 9: Illustration of Rules P5a–P7c. The numbers in circles represent degrees of vertices (plus signs stand for any degree not constrained in another part of the figure), the 4-face f sending charge is shaded and the pentagonal vertex receiving charge is denoted by v . The amount of charge sent is represented by the number in the middle of the face f .

Rule P7c If w is a double-sided vertex of degree seven, then v receives 0.5 units of charge from f .

Rule P8+ If the degree of w is eight or more, then v receives 0.5 units of charge from f .

The amount of final charge of faces and vertices after redistributing charge based on the above rules is analyzed in the next two sections.

5 Final charge of faces

In this section, we analyze the final amount of charge of faces in a minimal counterexample. Since 3-faces do not receive or send out any charge, it is enough to analyze the final charge of 4-faces. We break down the analysis into four lemmas that cover all possible cases how a 4-face can look like (up to symmetry). We start with 4-faces incident with two vertices of degree five.

Lemma 11. *Let $f = v_1v_2v_3v_4$ be a 4-face of a minimal counterexample. If the degrees of v_1 and v_3 are five, then the final amount of charge of f is non-negative.*

Proof. By Lemma 5, the degree of v_2 and v_4 is at least six, and by Lemma 8, no pentagonal vertex is close to f . Let k be the number of vertices of degree seven or more incident with f . By Rules P5a or P5b, the face f sends pentagonal vertices adjacent to v_1 or v_3 at most $2 \times k \times 0.2 = 0.4k$ units of charge. Let d_i be the degree of a vertex v_i , $i = 2, 4$. If $d_i = 6$ for $i = 2, 4$, then f sends out no charge to pentagonal vertices adjacent to v_i . If $d_i = 7$ for $i = 2, 4$, then the face f sends either 0.3 units of charge to at most two pentagonal vertices adjacent to v_i by Rule P7a or 0.5 units of charge to a single vertex by Rule P7b; this follows from the fact no two adjacent neighbors of a vertex v_i can be both pentagonal and the common neighbors of v_i and v_1 or v_3 are not pentagonal by Lemma 6. These two facts also imply for $d_i > 7$ that v_i sends to each of at most $(d_i - 3)/2$ pentagonal vertices adjacent to v_i 0.5 units of charge by Rule P8+.

Let us summarize. After Rules S1 and S2 apply, the amount of charge of f is equal to $d_2 + d_4 - 12$. We next distinguish several cases based on d_2 and d_4 :

- If $d_2 = 6$ and $d_4 = 6$, no further charge is sent out and the final charge of f is zero.

- If $d_2 = 6$ and $d_4 = 7$ (or vice versa), f sends out at most 0.4 units of charge to pentagonal vertices adjacent to v_1 or v_3 and at most 0.6 units of charge to such vertices adjacent to v_4 . Hence, its final charge is again non-negative.
- If $d_2 = 6$ and $d_4 > 7$ (or vice versa), f sends out at most 0.4 units of charge to pentagonal vertices adjacent to v_1 or v_3 and at most $(d_4 - 3)/4$ units of charge to such vertices adjacent to v_4 . Hence, its final charge is again non-negative.
- If $d_2 = 7$ and $d_4 = 7$, f sends out at most 0.8 units of charge to pentagonal vertices adjacent to v_1 or v_3 , at most 0.6 units of charge to pentagonal vertices adjacent to v_2 and at most 0.6 units of charge to pentagonal vertices adjacent to v_4 . Its final charge is again non-negative.
- If $d_2 = 7$ and $d_4 > 7$ (or vice versa), f sends out at most 0.8 units of charge to pentagonal vertices adjacent to v_1 or v_3 , at most 0.6 units of charge to such vertices adjacent to v_2 and at most $(d_4 - 3)/4$ units of charge to pentagonal vertices adjacent to v_4 . Hence, its final charge is again non-negative.
- If $d_2 > 7$ and $d_4 > 7$, the face f sends out at most 0.8 units of charge to pentagonal vertices adjacent to v_1 or v_3 , and at most $(d_2 + d_4 - 6)/4$ units of charge to such vertices adjacent to v_2 or v_4 . Hence, its final charge is again non-negative.

□

Next, we analyze 4-faces incident with vertices of degree seven or more only. Note that the bound on the number of pentagonal neighbors of vertices of a 4-face is also used in Lemmas 13–14 without giving so much details on its derivation as in the proof of Lemma 12.

Lemma 12. *Let $f = v_1v_2v_3v_4$ be a 4-face of a minimal counterexample. If the degrees of v_1 , v_2 , v_3 and v_4 are at least seven, then the final amount of charge of f is non-negative.*

Proof. Let D be the sum of the degrees of the vertices v_1 , v_2 , v_3 and v_4 . After Rule S2 applies to each of these four vertices, the face f has charge $D - 22$. Rules PC, P7a, P7b, P7c and P8+ apply at most $(D - 12)/2$ vertices. The vertices v_1 , v_2 , v_3 and v_4 have $D - 8$ neighbors not incident with the face f counting the common neighbors of them twice. Hence, if the common neighbors of v_i and v_{i+1} are counted once, there are at most $D - 12$

neighbors not incident with f and since no two adjacent vertices can be both pentagonal, the number of pentagonal neighbors is at most $(D - 12)/2$.

Rule PC can apply at most 4 times since a single 4-face can be close to at most 4 pentagonal vertices. Since f can send out at most 0.5 units of charge by Rules P7a, P7b, P7c and P8+, and it can send out at most 1 unit of charge by Rule PC, the 4-face f sends out at most the following amount of charge:

$$\frac{D - 12}{2} \times 0.5 + 4 \times 0.50 = \frac{D}{4} - 1.$$

By the assumptions of the lemma, the degree of each vertex v_i is at least 7 and thus $D \geq 28$. Since $D/4 - 1 \leq D - 22$ for $D \geq 28$, the final amount of charge of f is non-negative. \square

We next analyze 4-faces incident with a single vertex of degree five.

Lemma 13. *Let $f = v_1v_2v_3v_4$ be a 4-face of a minimal counterexample. If the degree of v_1 is five and the degree of v_3 is at least six, then the final amount of charge of f is non-negative.*

Proof. If all vertices v_2 , v_3 and v_4 have degree six, then f can send out 0.25 units of charge by Rule P6a to pentagonal neighbors of v_2 and v_4 (note that each of these two vertices has at most one such pentagonal neighbor) and 0.5 units of charge by Rule P6b to a pentagonal neighbor of v_3 . Observe that no pentagonal vertex is close to f by Lemma 8. Altogether, f receives no charge and sends out at most 2 units of charge (one unit by Rule S1 to v_1). Consequently, its final charge is non-negative.

If two of the vertices v_2 , v_3 and v_4 have degree six and one has degree $d \geq 7$, then f can send out at most 0.2 units of charge to a pentagonal neighbor of v_1 , at most 0.5 units charge to a pentagonal neighbor of each vertex of degree six, at most 0.5 to at most $(d - 3)/2$ pentagonal neighbors of the vertex of degree d and 1 unit of charge to v_1 . Altogether, it sends out at most $(d - 3)/4 + 2.2 = d/4 + 1.45$ units of charge. Since the initial charge of f amounts to 2 units and f receives $d - 6$ units by Rule S2, its final charge is non-negative if $d \geq 8$ (observe that $d/4 + 1.45 \leq d - 4$ for $d \geq 8$). If $d = 7$, then the face f sends at most 0.6 units of charge to pentagonal neighbors of the vertex of degree $d = 7$ (either twice 0.3 units by Rule P7a or 0.5 units by Rule P7b or P7c). Hence, the charge sent out by f is at most $0.6 + 2.2 = 2.8$ while the initial charge of f equals to 2 units and f gets 1 unit of charge from the vertex of degree $d = 7$ by Rule S2.

We now assume that only one of the vertices v_2 , v_3 and v_4 have degree six and the remaining two vertices have degrees d and d' , $d \geq 7$ and $d' \geq 7$. The face f sends out at most 0.40 units of charge to a pentagonal neighbor

of v_1 , at most 0.50 units of charge to a pentagonal neighbor of the vertex of degree six, and at most 0.50 units of charge to each of at most $(d + d' - 6)/2$ pentagonal neighbors of vertices of degree d and d' unless Rule PC applies. Rule PC can apply at most once by Lemma 8. Since the initial amount charge of f is 2, f receives $d + d' - 12$ units by Rule S2 and sends out at most $(d + d' - 6)/4 + 0.90 + 0.50 = (d + d')/4 - 0.10$ units of charge, the final charge of f is non-negative (note that $(d + d')/4 - 0.10 \leq d + d' - 10$ for $d \geq 7$ and $d' \geq 7$).

It remains to consider the case when all the vertices v_2 , v_3 and v_4 have degree at least seven. Let d_i be the degree of the vertex v_i , $i = 2, 3, 4$. There are at most $(d_2 + d_3 + d_4 - 9)/2$ pentagonal neighbors of the vertices v_2 , v_3 and v_4 and Rule PC can apply at most twice. In addition, the face f can send out 0.4 units of charge to a pentagonal neighbor of a vertex v_1 and 1 unit of charge to v_1 by Rule S1. Altogether, the amount of charge sent out by f is at most:

$$1.4 + \frac{d_2 + d_3 + d_4 - 9}{2} \times 0.5 + 2 \times 0.5 = \frac{d_2 + d_3 + d_4}{4} + 0.15 .$$

The initial amount of charge of f is 2 units and f receives $d_2 + d_3 + d_4 - 18$ units of charge by Rule S2 from the vertices v_2 , v_3 and v_4 . Hence, if $d_2 + d_3 + d_4 \geq 22$, then the final charge of the face f is clearly non-negative.

If $d_2 + d_3 + d_4 = 21$, then all the degrees d_2 , d_3 and d_4 must be equal to 7. If the vertices v_2 , v_3 and v_4 have six pentagonal neighbors, then none of them is close to f . Hence, Rule PC never applies. We conclude that f sends out at most the following amount of charge:

$$1.4 + 6 \times 0.5 = 4.4 .$$

On the other hand, if there are at most five pentagonal neighbors of v_2 , v_3 and v_4 , Rule PC can apply (at most twice). Hence, the charge sent out by f is at most:

$$1.4 + 5 \times 0.5 + 2 \times 0.5 = 4.9 .$$

Since the initial amount of charge of f is 2 units and f receives 3 units of charge from the vertices v_2 , v_3 and v_4 , its final charge is non-negative. \square

Finally, we analyze 4-faces incident with vertices of degree six but no vertices of degree five.

Lemma 14. *Let $f = v_1v_2v_3v_4$ be a 4-face of a minimal counterexample. If the degree of v_1 is six and the degrees of v_2 , v_3 and v_4 are at least six, then the final amount of charge of f is non-negative.*

Proof. Let D be the sum of the degrees of the vertices v_1, v_2, v_3 and v_4 . After Rule S2 applies to each of these four vertices, the face f has charge $D - 22$. We now distinguish several cases based on which vertices $v_i, i = 1, 2, 3, 4$, have degree six:

- If all vertices v_i have degree six, then there is no pentagonal vertex close to f by Lemma 7. Hence, each v_i is adjacent to at most one pentagonal vertex and f sends 0.5 units of charge by Rule P6b at most four times. This implies that the final amount of charge of f is non-negative.
- If three vertices v_i have degree six, then there is again no pentagonal vertex close to f by Lemma 7. Let d be the degree of the vertex with degree seven or more. Such vertex is adjacent to at most $(d - 3)/2$ pentagonal vertices and each other vertex to at most one pentagonal vertex. Hence, f sends out at most $(d - 3)/4 + 3/2 = d/4 + 3/4$ units of charge. Since its charge after applying Rule S2 was $D - 22 = d - 4$ and $d \geq 7$, its final amount of charge is non-negative.
- If two vertices v_i have degree six, then there is at most one pentagonal vertex close to f . The charge is sent by f to at most $(D - 12)/2$ pentagonal vertices and at most once by Rule PC. Hence, the total amount of charge sent out is at most

$$\frac{D - 12}{2} \times 0.5 + 0.5 = \frac{D}{4} - 2.5 .$$

Since $D \geq 26$ and the charge of f after applying Rule S2 is at $D - 22$, the final amount of charge of f is non-negative.

- If v_1 is the only vertex v_i with degree six, the charge is sent by f to at most $(D - 12)/2$ pentagonal vertices and at most twice by Rule PC. Hence, the total amount of charge sent out is at most

$$\frac{D - 12}{2} \times 0.5 + 2 \times 0.5 = \frac{D}{4} - 2 .$$

Since $D \geq 27$ and the charge of f after applying Rule S2 is at $D - 22$, the final amount of charge of f is non-negative.

□

6 Final charge of vertices

A minimal counterexample has no vertices of degree four or less by Lemma 3. The amount of final charge of vertices that are not pentagonal is non-negative:

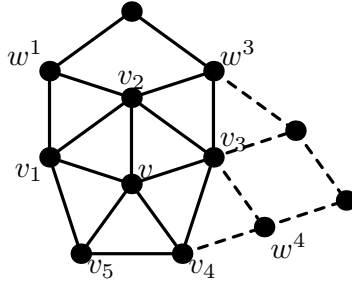


Figure 10: Notation used in the proof of Lemma 15.

vertices incident with a 4-face have zero final charge since only Rule S1 or S2 can apply to them and other non-pentagonal vertices keep their original (non-negative) charge since none of the rules applies to them (note that every vertex of degree five is either pentagonal or incident with a 4-face by Lemma 4).

Hence, we can focus on the amount of final charge of pentagonal vertices. Pentagonal vertices that are not solitary receive 1 unit of charge from a close 4-face by Rule PC and thus their final charge is non-negative. We now analyze the amount of charge of solitary pentagonal vertices and start with those adjacent to a vertex of degree five.

Lemma 15. *Every solitary pentagonal vertex v adjacent to a vertex of degree five has non-negative final charge.*

Proof. Let v_1, \dots, v_5 be the neighbors of v and f_i the 4-face containing the vertex v_i , $i = 1, \dots, 5$. By symmetry, we can assume that the degree of v_2 is five. Since no two 4-faces share a vertex, v has a double-sided neighbor v_k . Note that $k \neq 2$ and the 4-face f_k sends 0.5 units of charge to v (either by Rule P7c or Rule P8+).

Let w^1 be the common neighbor of v_1 and v_2 and w^3 the common neighbor of v_2 and v_3 (see Figure 10). Since the degree of v_2 is five, the degrees of w^1 and w^3 are at least six by Lemma 5. If the degree of w^1 is six, then the degree of v_1 is at least seven by Lemma 10 and the 4-face f_1 sends v at least 0.3 units of charge. Similarly, if the degree of w^3 is six, then the 4-face f_3 sends v at least 0.3 units of charge. On the other hand, if the degree of at least one of the vertices w^1 and w^3 is bigger than six, then v receives at least 0.2 units of charge from the 4-face f_2 , and if the degrees of both w^1 and w^3 are bigger than six, then v receives at least 0.4 units of charge from f_2 .

We conclude that if $k \notin \{1, 3\}$, then v receives 0.5 units of charge from f_k and at least 0.4 units of charge from the faces f_1 , f_2 and f_3 . In particular, the

final charge of v is non-negative unless v receives exactly 0.4 units of charge from the faces f_1 , f_2 and f_3 altogether. In such case, v receives 0.4 units of charge from f_2 , which implies that the degrees of w^1 and w^3 are more than six, and no charge is sent from f_1 or f_3 , which implies that the degrees of v_1 and v_3 are six and the degrees of their neighbors on f_1 and f_3 are five. Let us analyze this case in more detail. By symmetry, we can assume that $k = 5$. Let w^4 be the common neighbor of v_3 and v_4 . Since f_3 sends no charge, the degree of w^4 is five. Hence, the degree of v_4 is at least seven by Lemma 9. Consequently, the face f_4 sends v at least 0.3 units of charge. Altogether, v receives 0.4 units of charge from f_2 , at least 0.3 units of charge from f_4 and 0.5 units of charge from f_5 and its final charge is non-negative. We have just shown that if $k \notin \{1, 3\}$, then the final charge of v is non-negative.

In the rest, we assume that $k = 1$ and one of the following two cases applies (otherwise, the faces f_2 and f_3 send together at least 0.5 units of charge to v and the final charge of v is non-negative). The other cases are excluded by Lemmas 5 and 10.

- **The 4-face f_2 sends v no charge and the 4-face f_3 sends 0.3 units of charge.**

In this case, the degrees of both w^1 and w^3 are six and v_3 is a one-sided vertex with degree seven with both neighbors on f_3 of degree five. In particular, the common neighbor w^4 of v_3 and v_4 lies in the face f_3 and it has degree five. By Lemma 9, the degree of v_4 is at least seven and thus the 4-face f_4 sends at least 0.3 units of charge to v . In total, v receives 0.5 units of charge from f_1 , 0.3 units of charge from f_3 and at least 0.3 units of charge from f_4 . We conclude that the final charge of v is non-negative.

- **The 4-face f_2 sends 0.2 or 0.4 units of charge and the 4-face f_3 sends no charge.**

In this case, v_3 has degree six and its common neighbor w^4 with the vertex v_4 has degree five and lies on the face f_3 . Lemma 9 now implies that the degree of v_4 is at least seven. Hence, the face f_4 sends at least 0.3 units of charge to v . Summarizing, v receives 0.5 units of charge from f_1 , at least 0.2 units of charge from f_2 and at least 0.3 units of charge from f_4 which makes its final charge non-negative.

- **The 4-face f_2 sends 0.2 units of charge and the 4-face f_3 sends 0.25 units of charge.**

In this case, v_3 has degree six and its common neighbor w^4 with the vertex v_4 has degree five or six and lies on the face f_3 . Lemmas 9 and 10 yield that the degree of v_4 is at least seven. This implies that the face

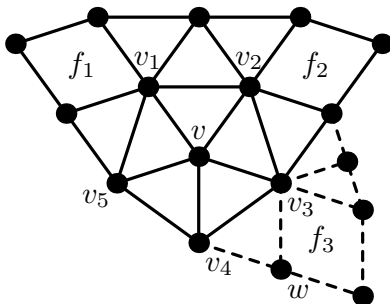


Figure 11: Notation used in the first part of the proof of Lemma 16.

f_4 sends at least 0.3 units of charge to v . We conclude that v receives 0.5 units of charge from f_1 , 0.2 units of charge from f_2 , 0.25 units of charge from f_3 and at least 0.3 units of charge from f_4 , and the final charge of v is non-negative.

□

It remains to analyze solitary pentagonal vertices adjacent to no vertices of degree five.

Lemma 16. *Every solitary pentagonal vertex v adjacent to no vertex of degree five has non-negative final charge.*

Proof. Let v_1, \dots, v_5 be the neighbors of v and f_1, \dots, f_5 the 4-faces incident with the neighbors of v as in the proof of Lemma 15. If v receives charge from at least four of the faces f_1, \dots, f_5 , then it receives at least 1 unit of charge in total and its final charge is non-negative. Hence, we can assume that v does not receive charge from two of the faces, by symmetry, from the face f_1 and the face f_2 or f_3 . Note that if v receives no charge from the face f_i , then v_i has degree six and both its neighbors on f_i must have degree five.

Let us first assume that the vertex v receives no charge from the faces f_1 and f_2 . The situation is depicted in Figure 11; note that the vertices v_1 and v_2 cannot have a common neighbor of degree five on a face f_1 or f_2 by Lemma 9. Observe that there must be a double-sided vertex v_k , $k \in \{3, 4, 5\}$. By Lemma 9, the degrees of the vertices v_3 and v_5 are at least seven. Hence, if $k = 4$, v receives at least 0.3 units of charge from the faces f_3 and f_5 and 0.5 units of charge from f_4 , and its final charge is non-negative.

We now assume that $k = 5$ and the face f_3 sends only 0.3 units of charge to v (otherwise, v receives 0.5 units of charge from f_3 and its final charge is non-negative). Hence, v_3 is a one-sided vertex of degree seven and the common neighbor w of v_3 and v_4 has degree five and lies on f_3 . Consequently, the

degree of v_4 is at least seven by Lemma 9. We conclude that v receives 0.3 units of charge from f_3 , at least 0.3 units of charge from f_4 and 0.5 units of charge from f_5 . Again, the final charge of v is non-negative.

We have ruled out the case that there would be two adjacent neighbors of v whose 4-faces sent no charge to v . Hence, it remains to analyze the case when the faces f_1 and f_3 send no charge to v . We claim that the face f_2 sends 0.5 units of charge to v . This clearly holds if v_2 is double-sided or its degree is at least eight. If the degree of v_2 is six, then f_2 sends 0.5 units of charge unless the neighbors of v_2 on f_2 have degrees five and six. Such configurations are excluded by Lemmas 9 and 10. Finally, if v_2 is one-sided and its degree is seven, then f_2 sends 0.5 units of charge to v unless both the neighbors of v_2 on f_2 have degree five. One of these neighbors is also a neighbor of v_1 or v_3 which is impossible by Lemma 10.

We have shown that v receives 0.5 units of charge from f_2 . Since v receives in addition at least 0.25 units of charge from each of the faces f_4 and f_5 , its final charge is non-negative. \square

Lemmas 11–16 now yield Theorem 1 as explained in Section 2.

7 Final remarks

If G is a plane graph with faces of size three only, then Four Color Theorem implies that G is cyclically 4-colorable. Our theorem asserts that every plane graph with faces of size three and four such that all faces of size four are vertex-disjoint is cyclically 5-colorable. It is natural to ask whether the following might be true:

Problem 1. *Every plane graph G with maximum face size Δ^* such that all faces of size four or more are vertex-disjoint is cyclically $(\Delta^* + 1)$ -colorable.*

Let us remark that it is quite easy to see that such graphs G are $(\Delta^* + 3)$ -colorable. Indeed, adding a clique to every face of size four or more results in a graph with average degree less than $\Delta^* + 3$. After removing a vertex from G that has degree less than $\Delta^* + 3$ in the modified graph and adding edges to G in such a way that big faces are still vertex-disjoint and all vertices lying on a common face in G lie on a common face in the new graph, induction can be applied to the new graph which yields the proof of the claimed bound.

References

- [1] M. Albertson: Chromatic number, independence ratio, and crossing number, *Ars Math. Contemporanea* 1 (2008), 1–6.
- [2] M. Albertson: Colorings and crossings, presentation at SIAM Conference on Discrete Mathematics 2008, Burlington, VT.
- [3] O. Amini, L. Esperet, J. van den Heuvel: A unified approach to distance-two colouring of planar graphs, manuscript.
- [4] K. Appel, W. Haken: Every planar map is four colorable, *Bull. Am. Math. Soc.* 82 (1976), 449–456.
- [5] O. Borodin: Solution of Ringel’s problems on vertex-face coloring of plane graphs and coloring of 1-planar graphs, *Met. Discret. Anal. Novosibirsk* 41 (1984), 12–26 (in Russian).
- [6] O. Borodin: Cyclic coloring of plane graphs, *Discrete Math.* 100 (1992), 281–289.
- [7] O. Borodin: A new proof of the 6 Color Theorem, *J. Graph Theory* 19 (1995), 507–521.
- [8] O. Borodin, D. P. Sanders, Y. Zhao: On cyclic colorings and their generalizations, *Discrete Math.* 203 (1999), 23–40.
- [9] H. Enomoto, M. Horňák, S. Jendrol’: Cyclic chromatic number of 3-connected plane graphs, *SIAM. J. Discrete Math.* 14 (2001), 121–137.
- [10] F. Havet, J. van den Heuvel, C. McDiarmid, B. Reed: List colouring squares of planar graphs, in: *Electronic Notes in Discrete Mathematics* 29 (2007), 515–519 (Proceedings of EuroComb’07).
- [11] F. Havet, J. van den Heuvel, C. McDiarmid, B. Reed: List colouring squares of planar graphs, manuscript.
- [12] F. Havet, D. Král’, J.-S. Sereni, R. Škrekovski: Facial colorings using Hall’s Theorem, submitted.
- [13] F. Havet, J.-S. Sereni, R. Škrekovski: 3-facial colouring of plane graphs, *SIAM. J. Discrete Math.* 22 (2008), 231–247.
- [14] M. Horňák, S. Jendrol’: On a conjecture by Plummer and Toft, *J. Graph Theory* 30 (1999), 177–189.

- [15] M. Horňák, S. Jendrol': On vertex types and cyclic colourings of 3-connected plane graphs, *Discrete Math.* 212 (2000), 101–109.
- [16] M. Horňák, J. Zlámalová: Another step towards proving a conjecture of Plummer and Toft, submitted.
- [17] D. Král', T. Madaras, R. Škrekovski: Cyclic, diagonal and facial coloring, *European J. Combin.* 26 (2005), 473–490.
- [18] D. Král', T. Madaras, R. Škrekovski: Cyclic, diagonal and facial coloring—a missing case, *European J. Combin.* 28 (2007), 1637–1639.
- [19] O. Ore, M. D. Plummer: Cyclic coloration of plane graphs, in: *Recent progress in combinatorics (Proceedings of the Third Waterloo Conference on Combinatorics, May 1968)* (W. T. Tutte, ed.), Academic Press, 1969.
- [20] M. D. Plummer, B. Toft: Cyclic coloration of 3-polytopes, *J. Graph Theory* 11 (1987), 507–515.
- [21] G. Ringel: Ein Sechsfarbenproblem auf der Kugel, *Abh. Math. Sem. Univ. Hamburg* 29 (1965), 107–117 (in German).
- [22] N. Robertson, D. Sanders, D. Seymour, R. Thomas: The four color theorem, *J. Combin. Theory Ser. B* 70 (1997), 2–44.
- [23] D. P. Sanders, Y. Zhao: A new bound on the cyclic chromatic number, *J. Combin. Theory Ser. B* 83 (2001), 102–111.